
















In each puzzle there are five pictures or drawings. Four of them go together in some way or are the same in some way. One of the pictures or drawings is different from the other four.

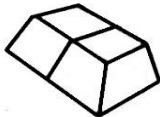
Mark box A, B, C, D, or E on the answer sheet to say which one is different.

1	A 	B 	C 	D 	E 
---	--	--	--	--	--

2	A 	B 	C 	D 	E 
---	--	--	--	--	--

3	A 	B 	C 	D 	E 
---	--	---	--	--	--

How many blocks are there? Find the number and mark its letter on the answer sheet. There are two blocks so mark box B on the answer sheet.

4		A 1	B 2	C 3	D 4	E 5
---	---	--------	--------	--------	--------	--------

These numbers get larger according to some rule or pattern, but one number breaks the rule. Which number breaks the rule? The answer is E.

5	A 1	B 2	C 3	D 4	E 9
---	--------	--------	--------	--------	--------

These numbers get smaller according to some rule or pattern, but one number breaks the rule. Which number breaks the rule? The answer is C.

6	A 40	B 30	C 23	D 20	E 10
---	---------	---------	---------	---------	---------